


Závěrečné OPÁČKO

z M



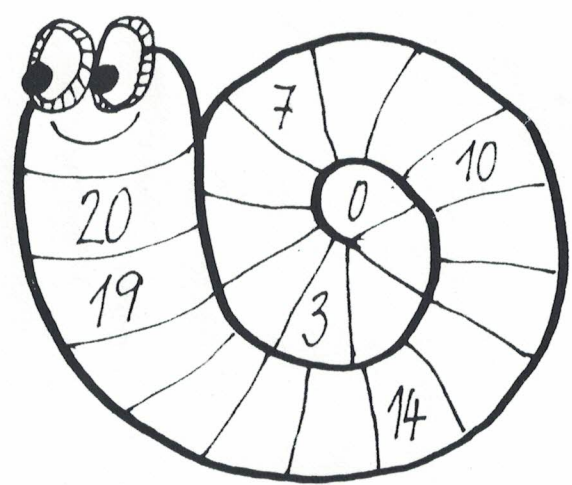
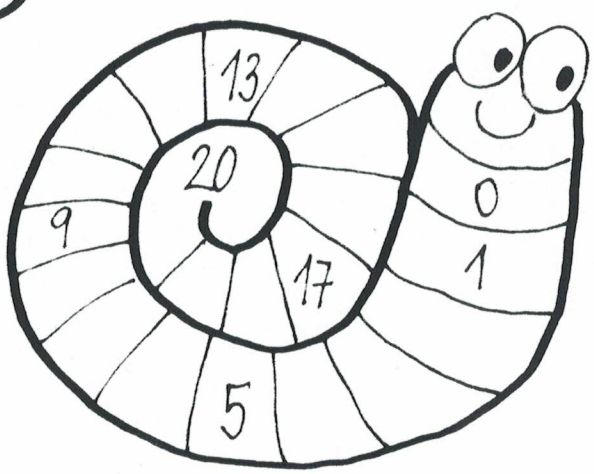
Jméno: _____


① D: _____

② + -

$18 - 6 = \square$	$11 + \square = 18$
$12 + 3 = \square$	$\square + 3 = 16$
$2 + 11 = \square$	$19 - \square = 15$
$20 - 4 = \square$	$20 - \square = 12$
$20 - 12 = \square$	$14 + \square = 20$

③ DOPLŇ ČÍSELNOU ŘADU



④  $2 + \bigcirc + 4 - \bigcirc + 5 + \bigcirc$

5) + -

8 + 5 = _____

13 - 5 = _____

6 + 9 = _____


12 - 8 = _____

4 + 7 = _____

11 - 4 = _____

9 + 3 = _____

14 - 5 = _____



6) POROVNEJ: < > =

20 12

18 11

12 >

16 17


0 10

16 <

9 19

13 13

19 =



7) + -

4 + 3 + 6 =

1 + 4 + 9 =

7 + 8 + 2 =

5 + 9 + 5 =

9

20	
16	
	3
12	
2	
	6
	19
20	
	15

8

