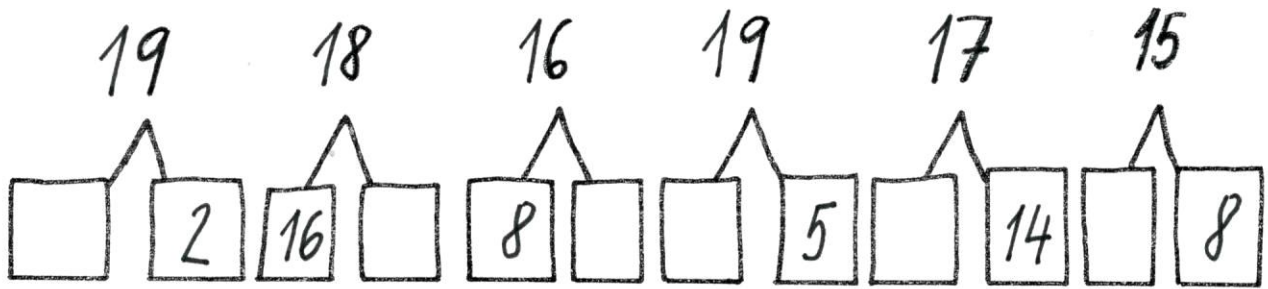
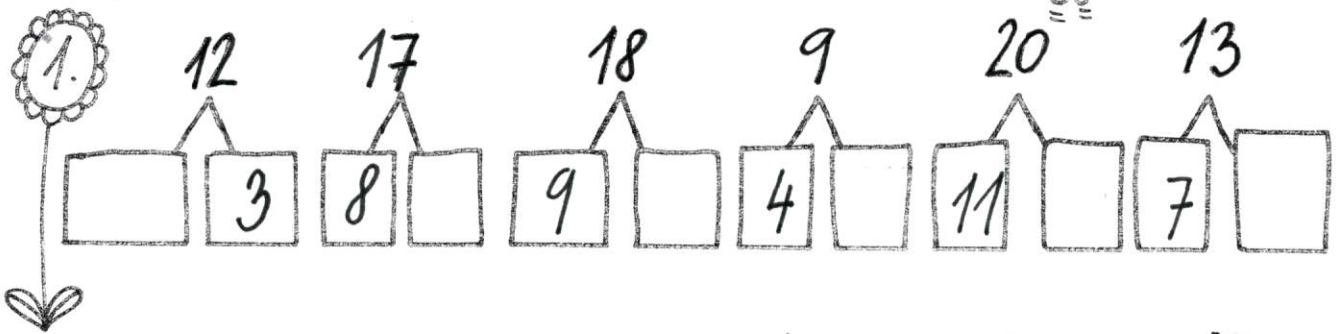


Doplň rozklad čísla:



$$11+3= \quad 2+5= \quad 14-3=$$

$$15-4= \quad 13-10= \quad 2+8=$$

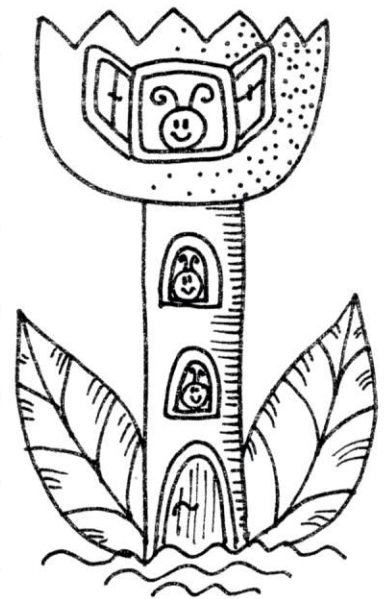
$$12+2= \quad 3+4= \quad 8-6=$$

$$9-6= \quad 15-2= \quad 2+11=$$

$$7+3+4= \quad 12+\square=15$$

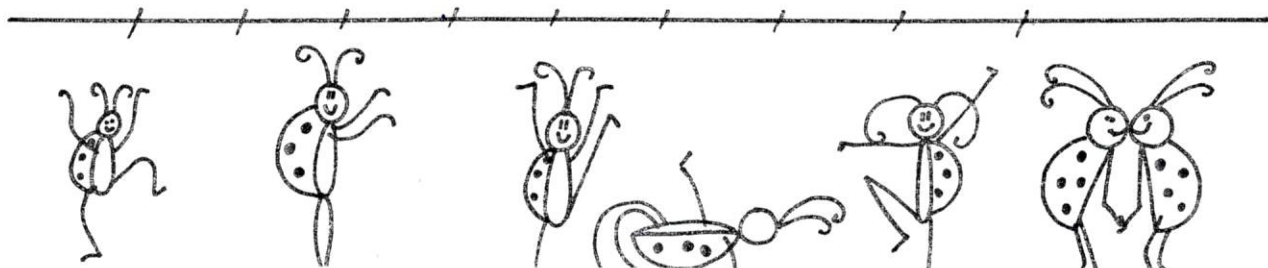
$$15-5-9= \quad 14-\square=10$$

$$13-10-3= \quad 2+\square=9$$



3. Seřad' čísla od nejmenšího k největšímu ☺ ☺ ☺.

14, 5, 10, 16, 3, 11, 20, 7, 19



Porovnej : >, <, =



$10 \square 11$

$13 \square 14$

$17 \square 12$

$15 \square 5$

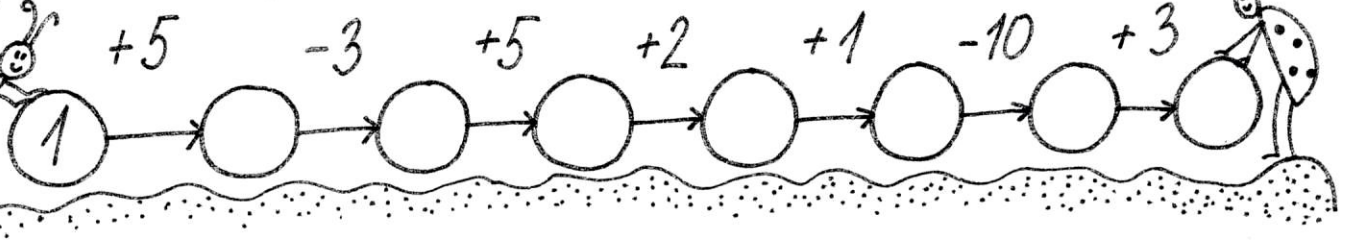
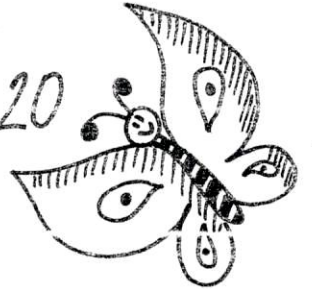
$19 \square 20$

$15 \square 5$

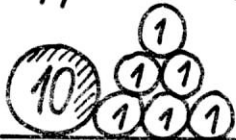
$14 \square 12$

$10 \square 10$


$2 \square 20$




Vypočítej, kolik berušce zbylo :



$\square = \square$



$\square = \square$



$\square = \square$

